


Time: 10 Minutes	Paper Math 3	Total Marks: 10
------------------	--------------	-----------------

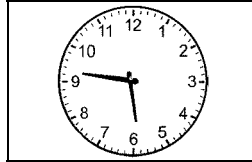
5th Month, 1st Week, 5th Day	Syllabus: Unit 5. Exercise # 1. Q # 3.
------------------------------	--

Q.1. Read the time from the following analog clock and write in the given box. (10)

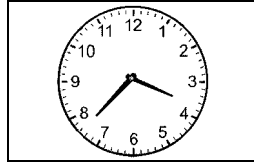
درج ذیل اینالاگ کلاک سے وقت پڑھیں اور دیئے ہوئے ڈبوں میں لکھیں۔



•



•



•



•



•



•

---



---



---



---




---

Time: 10 Minutes	Paper Math 3	Total Marks: 10
------------------	--------------	-----------------

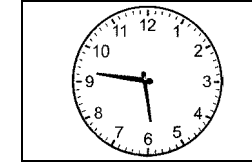
5th Month, 1st Week, 5th Day	Syllabus: Unit 5. Exercise # 1. Q # 3.
------------------------------	--

Q.1. Read the time from the following analog clock and write in the given box. (10)

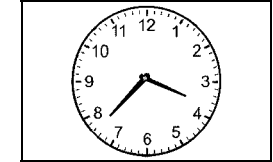
درج ذیل اینالاگ کلاک سے وقت پڑھیں اور دیئے ہوئے ڈبوں میں لکھیں۔



•



•



•



•



•



•

---



---



---



---



---